

PAPER-I

CODE NO: 0115P101

3

DO NOT OPEN THIS BOOKLET UNTIL YOU ARE ASKED TO DO SO

BOOKLET FOR OBJECTIVE TYPE TEST

Booklet Code

A

Answer all the Questions

Full Marks: 150

Time Allowed: 2 Hours

GENERAL INSTRUCTIONS

Candidates should read the following instructions carefully before answering the questions:-

1. Verify the seriality of the page numbers. If there is any discrepancy, bring it to the Invigilator's Notice.
2. All the boxes, ovals and the entries in the Answer Sheet must be filled up using **Black Ball-Point Pen only.**
3. Before you mark in the Answer Sheet, please fill the following in the appropriate places: -
 - Write name of the **Examination Centre.**
 - Write your **full name** in **Capital Letters.**
 - Put your **Left Thumb Impression** and **full signature.**
 - Write your **Roll No. (10 digits)** and **darken** the corresponding **10 ovals.**
 - **Darken** the **oval** corresponding to your **Category.**
 - **Darken** the **oval** corresponding to your **Booklet Code (A, B or C).**
 - **Darken** the **oval** to denote your **Gender.**
 - If you have darkened an oval by mistake, cross it. Now darken the oval you feel correct.



4. All questions are of Multiple Choice answer type. Please darken only one of the 4 probable answers [a], [b], [c] or [d]. Darkening more than one oval means you are writing a wrong answer.
5. There will be negative marking for each wrong answer @1:4.
6. There are blank pages at the end of this Booklet for rough work. Roll. No. must be written on each blank sheet used for Rough work. The sheets should not be torn out of the Question Booklet.
7. **Hand over the OMR Answer Sheet to the Invigilator before leaving the Examination Hall.**
8. Please do not leave the Examination Hall until the examination is over.
9. Please do not fold, scratch, scrimp or tear any portion of the Answer Sheet by any chance as this will render the Answer Sheet unsuitable for computer evaluation. Keep the Sheet away from gum.
10. Please ensure that the blank dotted line along the left side of margin of side 1 as also the right side of side 2 is not damaged in any way as it may affect the computer evaluation.
11. If error is detected in any particular question the candidates are advised not to attempt the same. The Commission do not award any marks to questions having any type of error.


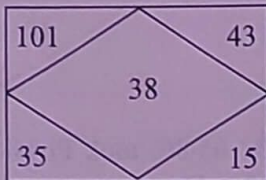
Please Turn Over

SET-A

1. Choose the correct alternative to express the right meaning of the given sentence:
The lady got _____ in the crowded bus.
(a) Suffocated (b) Elated (c) Bored (d) Enlightened
2. Who built the Stupa at Sanchi in Madhyapradesh?
(a) Harsha (b) Ashoka (c) Kanishka (d) Chandragupta
3. If $2=5$, $4=18$, $6=39$ then $10=?$
(a) 45 (b) 81 (c) 100 (d) 105
4. A word processor would most likely be used to do
(a) Keep an account of money spent (b) Do a computer search in media centre
(c) Maintain an inventory (d) Type a biography
5. The average age of 4 men is increased by two years, when two of them whose ages are 20 and 18 are replaced by two women. What is the total age of women?
(a) 44 (b) 46 (c) 40 (d) 42
6. The First Governor General of Bengal was:
(a) Lord Cornwallis (b) Lord Clive (c) Lord Wellesley (d) Warren Hastings
7. In a certain code language, '253' means 'Books are old', '546' means 'Man is old', '378' means 'Buy Good Books', what stands for 'Are' in that code?
(a) 2 (b) 4 (c) 5 (d) 6
8. Choose the antonym of the word ABRUPT from the alternatives provided
(a) Sudden (b) Uneven (c) Short (d) Gradual
9. A tank can be filled by two pipes A and B in 2 hours and 3 hours respectively. A third pipe C can empty the full tank in 6 hours. If all the taps can be turned on at the same time, the tank will be full in
(a) 1hour (b) 40 minutes (c) 1hour 30 minutes (d) 3 hours
10. Which can be used for quick access to commonly used commands and tools?
(a) Satus Bar (b) Tool Bar (c) Menu Bar (d) Title Bar
11. Arun Said "This girl is the wife of the grandson of my mother" Who is Arun to the girl?
(a) Father (b) Grand Father (c) Husband (d) Father-in-Law
12. Find the correct preposition to complete the sentence:
Nadira was successful _____ winning the match
(a) On (b) In (c) Over (d) Under
13. Delhi became the Capital of India in:
(a) 1910 (b) 1911 (c) 1916 (d) 1923
14. The difference between simple interest and compound interest on 2000 for 3 years at 5% is
(a) 10.25 (b) 15.25 (c) 12.25 (d) 11.35
15. Auto Correct was originally designed to replace _____ words as you type
(a) Short, repititive (b) Grammatically incorrect (c) Misspelled (d) None of the above

16. Who among the following Nobel Prize winners, was not an Indian Citizen?
(a) Subramaniam Chandra Sekhar (b) C V Raman
(c) Mother Teresa (d) Rabindranth Tagore
17. The glamorous model was dressed in _____ clothes
(a) Cheap (b) Dirty (c) Shabby (d) Gaudy
18. If \times means $+$, $+$ means \div , $-$ means \times and \div means $-$, then $8 \times 7 - 8 + 40 \div 2 = ?$
(a) 1 (b) $7\frac{2}{5}$ (c) $8\frac{3}{5}$ (d) 44
19. How can you remove borders applied in cells?
(a) Choose none on border tab of former cells
(b) Open the list on border tool in forming tool bar then choose first tool (No Border)
(c) Both of above
(d) None of above
20. In an examination every candidate took Physics, Mathematics or both. 65.8% took Physics and 59.2% took Mathematics. The total number of candidates was 2000. How many took both Mathematics and Physics?
(a) 750 (b) 700 (c) 550 (d) 500
21. Select the correct answer:
The noun form of Suffer is:
(a) Suffers (b) Suffrage (c) Suffering (d) Sufferness
22. Who produced the first automobile?
(a) Gottlieb Daimler (b) Henry Ford (c) Rudolf Diesel (d) Carl Benz
23. A man walks 1km towards East and then he turns to South and walks 5km. Again he turns to East and walks 2 km. After this he turns to North and walks 9 km. Now, How far is he from his starting point?
(a) 3km (b) 4km (c) 5km (d) 7km
24. Want a Power Point Photo album slide show to play continuously?
(a) Use random slide transitions (b) Launch an online broadcast
(c) Loop continuously (d) All of above
25. Square root of 27.04 is
(a) 5.2 (b) 5.4 (c) 5.8 (d) 5.12
26. The protein content in wheat is approximately:
(a) 6% (b) 8% (c) 12% (d) 16%

27. The 1st and 26th, 2nd and 25th, 3rd and 24th and so on, letters of the English alphabet are paired, then which of the following pairs is correct?
 (a) GR (b) CW (c) IP (d) EV
28. Choose the synonym of the word CELESTIAL from the alternatives provided:
 (a) Heavenly (b) Intelligent (c) Hardworking (d) Brave
29. 10 sheep and 5 pigs were bought for Rs 6000 = 00. If the average price of a sheep is Rs 450=00, find the average price of Pig
 (a) Rs 380 = 00 (b) Rs 410 = 00 (c) Rs 340 = 00 (d) Rs 300 = 00
30. "Ctrl+Page Down" key is used to
 (a) move the cursor one paragraph down (b) move the cursor one page down
 (c) move the cursor one line down (d) move the cursor one screen down
31. Find the missing figure:



- (a) 127 (b) 142 (c) 158 (d) 198
32. Find the correct preposition to complete the sentence:
 It has been raining heavily _____ the morning
 (a) in (b) on (c) since (d) to
33. The Indian National Army (INA) came into existence in:
 (a) Burma (b) Japan (c) Malaysia (d) Singapore
34. Page down key is used to
 (a) move the cursor one line down (b) move the cursor one page down
 (c) move the cursor one screen down (d) move the cursor one paragraph down
35. Three of the following four are alike in a certain way and form a group. The odd one is
 (a) 72 (b) 46 (c) 34 (d) 26
36. Find the correct alternative to express the right meaning of the given sentence:
 _____ the whistle blew, the train left the station.
 (a) No sooner (b) As soon as (c) No later (d) As late as
37. Which one of the following countries has the longest international boundary with India?
 (a) Bangladesh (b) Bhutan (c) China (d) Pakistan
38. If BOMBAY is written as MYMYMY, how will TAMILNADU be written in that code?
 (a) TIATIATIA (b) MNUMNUMNU (c) LATIATIAT (d) ALDALDALD
39. A dishonest shopkeeper uses a weight of 800 gram for a kg and professes to sell his goods at cost price. His profit is
 (a) 20.66% (b) 25% (c) 22.33% (d) 24%

40. "Ctrl+Home" is used to
(a) move the cursor to the beginning of document
(b) move the cursor to the beginning of line
(c) move the cursor to the beginning of paragraph
(d) all of the above.
41. Narmada river originates from Amarkantak in:
(a) Gujrat (b) Maharastra (c) Madhyapradesh (d) Chhattisgarh
42. Choose the correct alternative to express the right meaning of the given sentence:
Anil was disappointed as his proposal had been _____ by the committee
(a) Turned down (b) Turned up (c) Put down (d) Put up
43. Choose the odd pair of words:
(a) Water:Oxygen (b) Death:Disease (c) Milk:Butter (d) Grape:Wine
44. Want your logo in the same position on every slide, automatically? Insert it on the
(a) Hand out master (b) Notes master (c) Slide master (d) All of the above
45. The compound interest on a sum of money for three years at 5% is Rs 3783=00. What is the amount in case of simple interest?
(a) 3200 (b) 3500 (c) 3600 (d) 3700
46. Fill in the blank space:
4,10, _____ 82, 244,730
(a) 218 (b) 77 (c) 28 (d) 24
47. Which article of the constitution of India envisages free and compulsory education for children up to the age of 14 years?
(a) Article 45 (b) Article 19 (c) Article 29 (d) Article 32
48. Find the correct preposition to complete the sentence
Vinayanti swam _____ the river
(a) into (b) towards (c) across (d) under
49. A man went to the Reserve Bank of India with Rs 2000=00 only. He asked the cashier to give him only 10 Rupee notes and 20 Rupee notes. The man got 150 notes in total. How many notes of Rs 10=00 did he receive.
(a) 100 (b) 150=00 (c) 50 (d) 70
50. Which command brings you to the first slide in your presentation?
(a) Next slide button (b) Page up (c) Ctrl+Home (d) Ctrl+End
51. Choose the antonym of the word LETHARGIC from the alternatives provided:
(a) Lazy (b) Idle (c) Indolent (d) Energetic
52. If England is written as 1234526 and France is written as 785219, How is Greece coded?
(a) 381171 (b) 381191 (c) 832252 (d) 835545

53. After textiles, India's second important industry is:
 (a) Sugar (b) Jute (c) Cement (d) Iron and Steel
54. How can you quickly reinstate a deleted footer place holder in master view?
 (a) Create a new slide master (b) Re-apply the footer place holder
 (c) Re-apply the slide lay out (d) All of the above
55. The radius of a wheel is 7 cm. How many revolutions will make it to move 44 kilometre
 (a) 7000 (b) 10,000 (c) 1,00,000 (d) 14,000
56. Find the missing letter in the matrix

A	M	B	N
R	C	S	D
E	U	F	?

- (a) G (b) R (c) T (d) V
57. FIFA world Cup 2018 Would be held in:
 (a) Russia (b) Qatar (c) France (d) Netherlands
58. Choose the correct answer:
 'To break the ice' means:
 (a) To do hard work (b) To light a fire (c) To insult someone (d) To be friendly
59. Two numbers X and Y are such that $x=y^2$. If Y is increased by 10% then X is increased by
 (a) 100% (b) 11% (c) 21% (d) None of these
60. By default, on which page the header or the footer is printed?
 (a) On first page (b) On alternate page (c) On every page (d) None of the above
61. How many prime numbers are between 50 and 100?
 (a) 8 (b) 9 (c) 10 (d) 11
62. Jallianwalla Bagh massacre occurred on:
 (a) January 30, 1918 (b) April 13, 1919 (c) August 14, 1920 (d) July 3, 1930
63. Fill up the blank with the alternatives provided:
 Aligarh Muslim University _____ by Syed Ahmed Khan
 (a) Was found (b) Has found (c) Has not found (d) Was founded
64. You can set page border in excel from
 (a) From border tab format cells dialog box (b) From border tool in formatting tool bar
 (c) From line style tool in drawing tool bar (d) You cannot set page border in excel
65. Choose the correct alternative that is similar to the given set (18,8,2):
 (a) (11, 12, 10) (b) (3, 7, 1) (c) (24, 22, 4) (d) (17, 9, 3)
66. Who among the following wrote the book 'Algebra of Infinite Justice'
 (a) Anita Desai (b) Vikram Seth (c) Arundhati Roy (d) Rohinton Mistry

67. You can check the conditions against _____ when applying conditional formatting.
(a) Cell value (b) Formula (c) Both of above (d) None of above
68. Choose the best alternative:
40 : 21 : : 120 : ?
(a) 65 (b) 52 (c) 61 (d) 67
69. If the price of sugar is raised by 20%, by how much percent a house holder must reduce his consumption so as not to increase the expenditure?
(a) 16.67% (b) 20% (c) 12.75% (d) 8.33%
70. Choose the correct answer:
Neither she _____ her sister came to the wedding ceremony
(a) nor (b) or (c) not (d) and
71. When a range is selected, how can you activate the previous cell?
(a) Press the Alt key (b) Press tab (c) Press enter (d) None of the above
72. Choose the numerical pair which is different from others:
(a) 54-152 (b) 46-128 (c) 28-78 (d) 25-65
73. Find the correct preposition to complete the sentence:
The interviewee was asked to speak _____ himself
(a) in (b) at (c) over (d) about
74. A thief running at 8 kms/hour is chased by a policeman whose speed is 10km/hour. If thief is 100 meters ahead of policeman at the commencement of the chase then the time required for the policeman to catch the thief will be
(a) 2 minutes (b) 6 minutes (c) 3 minutes (d) 10 minutes
75. A retired Judge of High Court cannot:
(a) practice in the Supreme Court
(b) practice in High Court of India
(c) practice in the High Court from where he has retired
(d) practice in any court of India.
76. Writer is related to reader in the same way as producer is related to _____
(a) Seller (b) Consumer (c) Creator (d) Contractor
77. Choose the correct alternative to express the right meaning of the given sentence:
The man _____ the stairs carefully to reach the under ground station.
(a) ascended (b) escalated (c) elevated (d) descended
78. In honey, which one among the following sugars predominates?
(a) Sucrose (b) Fructose (c) Galactose (d) Maltose
79. Which of the following features should you use when typing in the notes text box?
(a) Slide show (b) Insert (c) Slide Maser (d) Zoom

80. A boat moves down the stream at the rate 1 km in 6 minutes and upstream at the rate 4km/hour. What is the speed of boat in still water?
 (a) 8 km/hour (b) 7 km/hour (c) 9 km/hour (d) None of the above
81. Iron rusts quickly in:
 (a) Rain water (b) Sea water (c) Distilled water (d) River water
82. Select the pair in which the letter-group are similarly related as in the pair BC:FG
 (a) PQ:ST (b) HI:LM (c) AD:PQ (d) JK:LM
83. 'To add insult to injury' means:
 (a) To beat up a person (b) To accuse a person
 (c) To worsen an unfavourable situation (d) To work hard to achieve something
84. By selling 11 oranges for a rupee, a man loses 10%. How many oranges for a rupee should be sold so as to earn a profit of 10%?
 (a) 9 (b) 10 (c) 8 (d) 11
85. Which option allows you to select line, curve free form or scribble tools?
 (a) Create effect (b) Insert motion path (c) Draw custompath (d) All of above
86. Choose the synonym of the word TAINTED from the alternatives provided:
 (a) Scented (b) Colourful (c) sad (d) stained
87. Which tool you will use to join some cells and place the content at the middle of joined cell?
 (a) From format cells dialog box click on merge cells check box
 (b) From format cells dialog box select the centered alignment
 (c) From format cells dialog box choose merge and center check box
 (d) Click on merge and center on formatting tool bar.
88. In a school of 500 students 102 students can read Hindi and Tamil both, 200 students can read only Hindi. The students who can read only Tamil is
 (a) 402 (b) 198 (c) 302 (d) 300
89. National Institute of Nutrition (NIN) central office is located at:
 (a) Hyderabad (b) Mumbai (c) Bengaluru (d) Chennai
90. P'S father is Q'S son. M is the paternal uncle of P and N is brother of Q. How is N related to M?
 (a) Brother (b) Nephew (c) Cousin (d) None of these
91. Each excel file is a work book that contains different sheets. Which of the following cannot be a sheet in the work book?
 (a) Work sheet (b) Chart sheet (c) Module sheet (d) Data sheet
92. Where is the Headquarters of Hindustan Zinc Ltd?
 (a) Udaipur (b) Jodhpur (c) Jaisalmer (d) Jaipur
93. Fill up the blank:

4C	23	3A
28A	?	45B
7C	5A	15B


- (a) 10C (b) 12C (c) 13C (d) 7C

94. A right circular cone and a right circular cylinder have the same radius and same volume. The ratio of height of cone to that of the cylinder is
(a) 5:3 (b) 5:2 (c) 1:3 (d) 3:1
95. Select the correct answer:
'Who does not love icecream'? Implies that ' _____ ' loves ice cream
(a) Some one (b) No one (c) Every one (d) None of these
96. You can merge the main document with data source in excel. In mail merge operation, word is usually
(a) Server (b) Source (c) Client (d) None
97. Two solutions of 90% and 97% purity are mixed resulting in 21 litre of mixture of 94% purity. How much is the quantity of first solution in the resulting mixture?
(a) 9 Litre (b) 12 Litre (c) 11 Litre (d) 14 Litre
98. A man is facing towards west and turns through 45° clockwise, again 180° clockwise and then turns through 270° anticlockwise. In which direction is the facing now?
(a) West (b) North West (c) South (d) South West
99. The first satellite was launched by:
(a) Japan (b) USA (c) Russia (d) France
100. IF $x^2 - 5x + 1 = 0$, the value of $x^2 + 1/x^2$ is
(a) 21 (b) 25 (c) 23 (d) None of these
101. How can you show or hide the guidelines in Excel work sheet?
(a) Go to tools >> options >> view tab and mark or remove the check box named gridline
(b) Click gridline tool on forms tool bar
(c) Both of above
(d) None of above
102. Choose the correct alternative to express the right meaning of the given sentence:
The film you wanted to see will _____ tomorrow
(a) shown (b) to be shown (c) showed (d) be showed
103. Which of the following is used as a fuel in Nuclear Power Stations in India
(a) Thorium (b) Copper (c) Tin (d) Chromium
104. Which of the following words will come second in the English dictionary?
(a) Magical (b) Magnify (c) Marshal (d) Magnetic
105. The average height of a class of 25 students is 140. Five more students join the class and the average height increases to 145cms. The average height of new entrants is
(a) 135cms (b) 150cms (c) 165cms (d) 170cms
106. The sun is visible a little before the actual sunrise because of which one of the following?
(a) Atmospheric reflection (b) Atmospheric dispersion
(c) Atmospheric diffraction (d) Atmospheric refraction

107. To exit from the resume wizard and return to the document window without creating a resume, click the _____ button in any panel in the resume wizard dialog box
(a) Cancel (b) Back (c) Next (d) Finish
108. A person covers a certain distance by a car at a speed of 12km/hour and comes back at a speed of 24km/hour. The average speed during the travel is
(a) 16 km/hour (b) 15 km/hour (c) 18km/hour (d) 16.5km/hour
109. Find the correct article to complete the sentence:
Monorima said that her trip to Ladakh was _____ unique experience.
(a) a (b) an (c) the (d) some
110. In the series 10, 17, 24, 31, 38, ... which of the following will be a number of the series?
(a) 48 (b) 346 (c) 574 (d) 1003
111. Pick out the synonyms of the word HYPOCRISY from the alternatives provided:
(a) Optimism (b) Cheerfulness (c) Honesty (d) Two-Facedness
112. In acronym 'SAARC'. 'C' stands for:
(a) Committee (b) Commonwealth (c) Conference (d) Cooperation
113. IF $A+B = C+D$ and $A+D > B+C$, then which one of the following is definitely wrong?
(a) $A > B$ (b) $A > C$ (c) $C > D$ (d) $B > D$
114. Which of the following Excell screen components can not be turned on or off?
(a) Formula Bar (b) Status Bar (c) Tool Bar (d) None of above
115. A square and an equilateral triangle have equal parameter. If the diagonal of the square is $12\sqrt{2}$ cm, the area of the triangle is
(a) $64\sqrt{3}\text{cm}^2$ (b) $48\sqrt{3}\text{cm}^2$ (c) $24\sqrt{3}\text{cm}^2$ (d) $36\sqrt{3}\text{cm}^2$
116. Who has taken maximum wickets in one-day internationals?
(a) Shane Warne (b) Muthia Muralitharan (c) Kapil Dev (d) Wasim Akram
117. Which of the following option is not available in paste special dialog box?
(a) Add (b) Subtract (c) Divide (d) SQRT
118. What would be the printed price of a watch, purchased at Rs. 380=00, so that after giving 5% discount, there is a profit of 25%?
(a) Rs. 400=00 (b) Rs. 450=00 (c) Rs. 500=00 (d) Rs. 550=00
119. Choose the correct alternative to express the right meaning of the given sentence:
'It is very cold night' can be rewritten as _____ a cold night it is!
(a) Who (b) When (c) What (d) How
120. Find the wrong term in the series: 1, 3, 10, 21, 64, 129, 356, 777
(a) 21 (b) 129 (c) 10 (d) 356

121. A, B, C can do a work in 6 days. A and C together can do it in 10 days. In how many days can B alone do the work?
(a) 12 days (b) 18 days (c) 16 days (d) 15 days
122. Which of the cell pointer indicates you that you can make selection?
(a) Doctor's symbol (Big Plus)
(b) Small thin plus icon
(c) Mouse pointer with anchor at the tip
(d) None of above
123. Who was the first Indian to receive the MAG SAYSAY award?
(a) Indira Gandhi (b) T N Seshan (c) Kiran Bedi (d) Vinoba Bhawe
124. A boat is rowed down a river at 16km/hour and up the river at 8km/hour. The distance travelled by the boat in still water in 2 hour is
(a) 12km (b) 24km (c) 16km (d) 8km
125. IF '<' means 'Minus','>' means 'Plus', '=' means 'Multiplied By' and '\$' means 'Divided By', Then what would be the value of $27 > 81 \$ 9 < 6$?
(a) 6 (b) 30 (c) 36 (d) 54
126. Which of the following is not a statutory body?
(a) Election commission (b) Finance Commission
(c) Planning Commission (d) Union Public service commission
127. The least number by which 450 must be multiplied in order to make it a perfect square is
(a) 4 (b) 2 (c) 3 (d) 5
128. Presentation designs regulate the formatting and layout for the slide and are commonly called
(a) Design plates (b) Templates (c) Place Holders (d) Blue Prints
129. Choose the correct answer:
She was _____ excited to speak
(a) to (b) two (c) too (d) do
130. If 'Delhi' can be coded as 'CC IDD', How would you code 'Bombay'?
(a) AJMTVT (b) AMJXVS (c) MJXVSU (d) WXYZAX
131. The weight of an object would be minimum when it is placed:
(a) At the Equator (b) At the North Pole (c) At the South Pole (d) At the Centre of the Earth
132. Long text can be broken down into many lines within a cell. You can do this through
(a) Wrap text informat >> cells (b) Justify in edit >> cells
(c) Text wrapping in format >> cells, Layout lab (d) All of above

133. A 240 metre long train crosses a platform in 20 seconds. What is the speed of train?
 (a) 10 mt/sec (b) 20 mt/sec (c) 24 mt/sec (d) Cannot be determined
134. Select the synonym of the word MELANCHOLY from the alternatives provided:
 (a) Musical (b) Happy (c) Fortunate (d) Unhappy
135. If 'Blue' means 'Green', 'Green' means 'White', 'White' means 'Yellow', 'Yellow' means 'Black', 'Black' means 'Red' and 'Red' means 'Brown', then what is the colour of milk
 (a) Black (b) Blue (c) Green (d) Yellow
136. Which of the following disease is caused due to defective genes?
 (a) Diabetis (b) Ulcer (c) Haemophilia (d) Cancer
137. Pick out the antonym of the word SUPERIOR from the alternatives provided:
 (a) Inferior (b) Interior (c) Posterior (d) Exterior
138. A solid sphere of 7cm diameter is melted and converted into a right circular cone of height 14cm. The radius of base is
 (a) 3.5cm (b) 7cm (c) 14cm (d) 7.5cm
139. To add a Header or Footer to your handout, you can use
 (a) The title master (b) Slide master (c) The handout master (d) All of above
140. Find the number of triangles in the following figure:



- (a) 28 (b) 32 (c) 8 (d) 10
141. The area (In Square Centimeter) of the largest circle that can be inscribed in a square with each side measuring 28 centimeter is
 (a) 616 (b) 784 (c) 336 (d) 824
142. When water is heated from 0°C to 10°C, the volume of water:
 (a) Increases steadily (b) Decreases steadily
 (c) First increases then decreases (d) First decreases then increases
143. When using power point, to play a power point show for previewing the show, select
 (a) View, slide sorter (b) View slide (c) View, slide show (d) View outline
144. Choose the correct answer:
 The critical patient was _____ to the city hospital
 (a) referred (b) reffered (c) refered(d) (d) referd

145. Choose the odd pair of words:
(a) See:Eye (b) Hear:Ears (c) Tongue:Taste (d) Smell:Nose
146. A person returning from abroad can retain foreign currency upto what period?
(a) 60 days (b) 30 days (c) 90 days (d) 180 days
147. Money doubles itself in five years. A man invests Rs.500 = 00 in each of the years 1970, 1975 and 1980. The amount he received in 1990 is
(a) Rs.75000 = 00 (b) Rs.140000 = 00 (c) Rs.125000 = 00 (d) Rs.150000 = 00
148. What is the best place to find animated images for your power point 2002 presentation?
(a) Microsoft online (b) Word Clipart
(c) Power point tools and ins (d) All of the above
149. A man is performing yoga with his head down legs up. His face is towards the West. In which direction will his left hand be?
(a) North (b) South (c) East (d) West
150. Pick out the synonym of the word AUSPICIOUS from the alternatives provided:
(a) Lucky (b) Airy (c) Large (d) Spacious